

Mrs. Molina-Bardino

Math class work

5/18/2020-5/22/2020

Period 5

FOCUS: Yearly Review

(Page 138 and 15 are to be done with me on zoom) (Page 187 and 169 are the tests that are to be done with me on zoom)

	Monday	Tuesday	Wednesday	Thursday	Friday
worksheet	Page 15	Page 179	Time worksheet	Page 58	

Important information for parents

- Make sure you are attending all classes on zoom
- Check out my website!
- You can now pick up packets every Friday after 3pm (drop off in the same bin)
- Please use the same zoom login numbers to get in to my zoom classes and password is stride (on my website)
- Using manipulatives can help your child greatly understanding the concepts better
- All videos to help parents and students for my lessons can be found on my website
- Every Friday is a B day, and we only have second period at 9:30am.
- My website is <https://msmolinasclass.weebly.com/>
- You can also find my page under “teacher websites” on the learning Links page
- <https://www.learninglinksschool.org/Teacher-Websites.html>
- Learning Links School Directory Phone Number is (305) 907-7551 my extension is 712

We will do this work sheet together on Monday on Zoom

Name _____

Date _____


Addition

Read each story below, and work the math problems to find the answers.

75

Ken wants pizza for dinner. He orders a pizza for \$13.25. He wants to give the driver a tip of \$2.00. How much money will he pay?

\$ 13.25



pizza

+ 2.00



for a tip

\$

paid for the pizza plus tip

76

Mattie is buying an outfit for her nephew. The one she chooses is \$12.10. She gets it gift-wrapped for \$1.50. How much money will she pay?

\$ 12.10



for



baby outfit

+ 1.50



for



gift wrap

\$

paid for baby outfit and gift wrap

We will do this worksheet together on Monday on Zoom

Name:

Date:

Zoom

Addition

WARM-UP 19

Directions: Write the sum for each problem. Remember to regroup the ones.

1

2	5	9
+4	0	6
<hr/>		

2

4	2	7
+2	4	7
<hr/>		

Name:

Date:

Addition

WARM-UP 20

Directions: Write the sum for each problem. Remember to regroup.

1

$$\begin{array}{r} 852 \\ +428 \\ \hline \\ \hline \end{array}$$

2

$$\begin{array}{r} 452 \\ +262 \\ \hline \\ \hline \end{array}$$

3

$$\begin{array}{r} 274 \\ +158 \\ \hline \\ \hline \end{array}$$

Name:

Date:

Addition

WARM-UP 19

Directions: Write the sum for each problem. Remember to regroup the ones.

1

2	5	9
+ 1	0	6

2

4	2	7
+ 2	4	7

Name:

Date:

Addition

WARM-UP 20

Directions: Write the sum for each problem. Remember to regroup.

1

$$\begin{array}{r} 352 \\ + 128 \\ \hline \\ \hline \end{array}$$

2

$$\begin{array}{r} 152 \\ + 262 \\ \hline \\ \hline \end{array}$$

3

$$\begin{array}{r} 271 \\ + 158 \\ \hline \\ \hline \end{array}$$

Name:

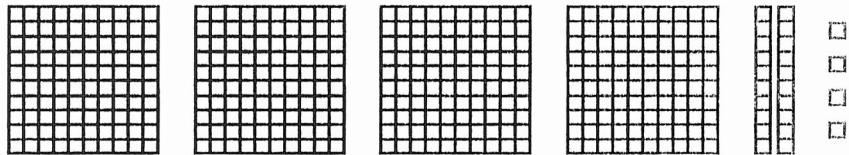
Date:

Subtraction

WARM-UP 19

Directions: Subtract the units. First, subtract the ones, then subtract the tens, and finally subtract the hundreds.

$$\begin{array}{r}
 424 \\
 - 214 \\
 \hline
 \\
 \hline
 \end{array}$$



Name:

Date:

Subtraction

WARM-UP 20

Directions: Write the solution for each problem.

1

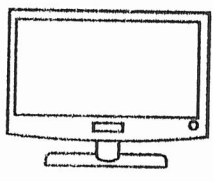
Hundreds	Tens	Ones
6	4	5
-3	2	2

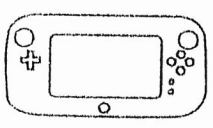
2

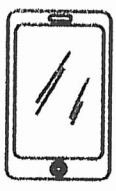
Hundreds	Tens	Ones
2	8	6
-1	4	5

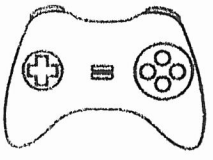
Name: _____ Date: _____


Cut and glue the time that matches each item. Circle AM or PM.


	The 6:00 morning news is on when you watch TV while you eat your breakfast.		AM
			PM

	You can play your gameboy at 8:00 after you finish your homework at night.		AM
			PM

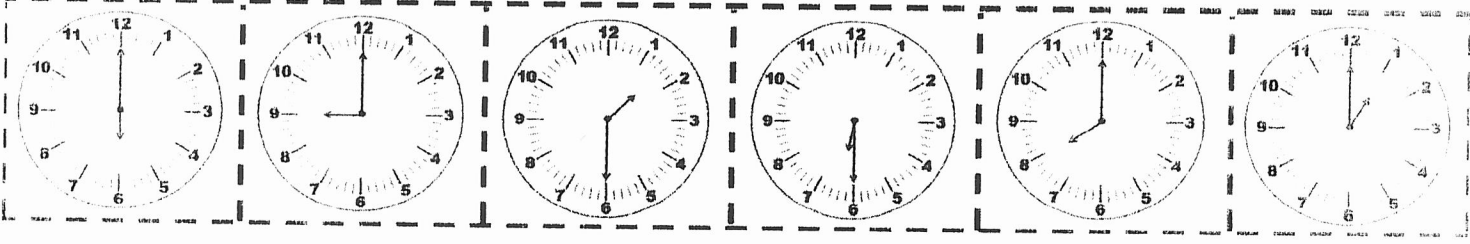
	The alarm on your phone wakes you up at 6:30 in the morning.		AM
			PM

	Your best friend invites you over to play videos games at 1:30.		AM
			PM

	You listen to your music using your headphones at 1:00 during lunchtime.		AM
			PM

	You eat supper and then have to do your homework on the computer until 9:00		AM
			PM

© Breezy Special Ed




Name:

Date:

Assessment

PICTOGRAPHS

Directions: Look at the pictograph. Then, read each question. Fill in the circle below the correct answer.



1 How many elephants are at the zoo?

1 elephant

3 elephants

4 elephants

2 How many lions are at the zoo?

1 lion

2 lions

3 lions

3 How many monkeys are at the zoo?

3 monkeys

4 monkeys

5 monkeys

4 How many zebras are at the zoo?

3 zebras

4 zebras

5 zebras

5 What does this graph show?

pets people own

animals at the zoo

wild animals in the park

We will use this as our test on Wednesday
Name: Do Not Complete! Date: on Zoom

Final Assessment

ADDITION 1

Directions: Fill in the circle next to the correct sum.

A

$$\begin{array}{r} 45 \\ + 23 \\ \hline \end{array}$$

- 67 86 68

1

$$\begin{array}{r} 8 \\ + 7 \\ \hline \end{array}$$

- 1 15 87

2

$$\begin{array}{r} 10 \\ + 5 \\ \hline \end{array}$$

- 5 15 51

3

$$\begin{array}{r} 15 \\ + 14 \\ \hline \end{array}$$

- 29 92 34

4

$$\begin{array}{r} 75 \\ + 24 \\ \hline \end{array}$$

- 51 59 99

5

$$\begin{array}{r} 247 \\ + 121 \\ \hline \end{array}$$

- 326 265 368

We will use this as our test on Wednesday on Zoom




Name: *Do Not Complete!*

Date: *on Zoom*

Final Assessment

PLACE VALUE

Directions: Look at the items in each box. Then, fill in the circle next to the matching number.

<p>A</p> 	<p><input type="radio"/> 312 <input type="radio"/> 123 <input checked="" type="radio"/> 321</p>
<p>1</p> 	<p><input type="radio"/> 13 <input type="radio"/> 310 <input type="radio"/> 31</p>
<p>2</p> 	<p><input type="radio"/> 258 <input type="radio"/> 285 <input type="radio"/> 852</p>

Directions: Look at each number. Then, fill in the circle next to the place values that match the number.

<p>B</p> <p>153</p>	<p><input checked="" type="radio"/> 1 hundreds 5 tens 3 ones <input type="radio"/> 3 hundreds 5 tens 1 ones</p>
<p>3</p> <p>154</p>	<p><input type="radio"/> 4 hundreds 5 tens 1 ones <input type="radio"/> 1 hundreds 5 tens 4 ones</p>
<p>4</p> <p>94</p>	<p><input type="radio"/> 9 hundreds 4 tens 0 ones <input type="radio"/> 0 hundreds 9 tens 4 ones</p>
<p>5</p> <p>687</p>	<p><input type="radio"/> 6 hundreds 8 tens 7 ones <input type="radio"/> 8 hundreds 7 tens 6 ones</p>